

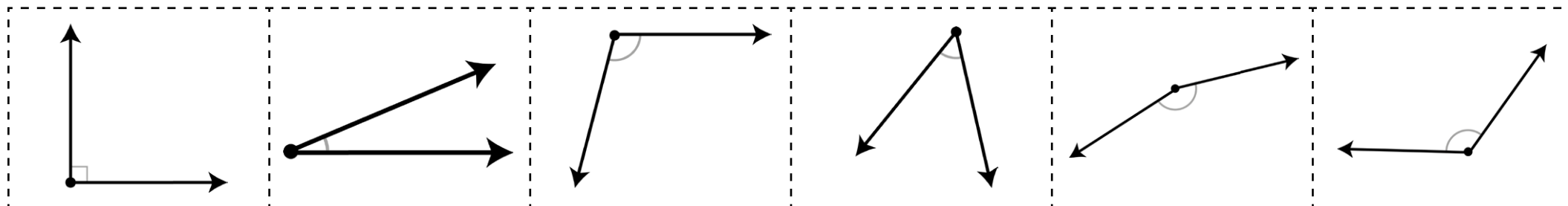
Order the Angles

I can order angles up to 180° .

Sort the angles from smallest to largest.

Smallest

Largest



Order the Angles

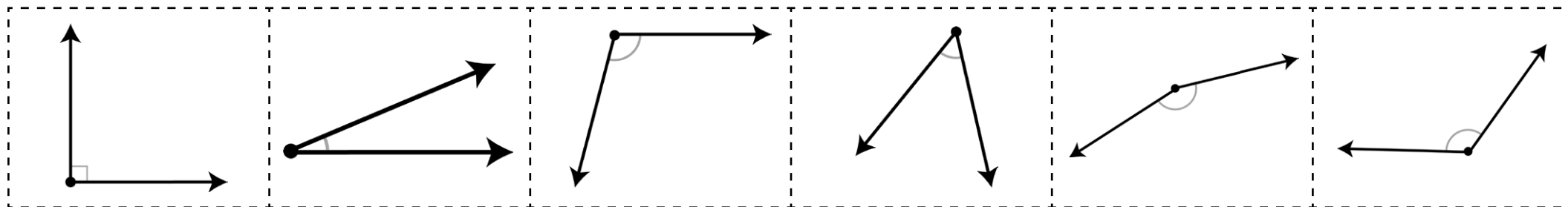
I can order and compare angles up to 180° .

1. Sort the angles from smallest to largest.
2. Write if the angles are acute, obtuse or right angles.

Smallest

Largest

Cut out and use these angles to order.

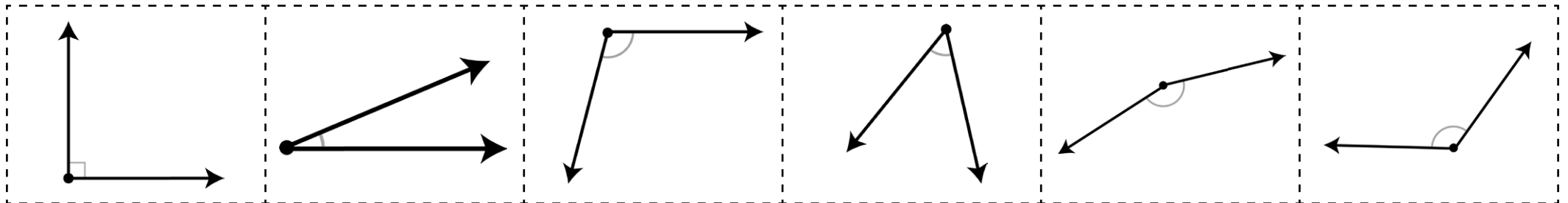




Compare the Angles

Write mathematical sentences using the $<$ or $>$ signs to compare two angles.

Cut out and use these angles to compare.





Order the Angles

I can order and compare angles up to 180° .



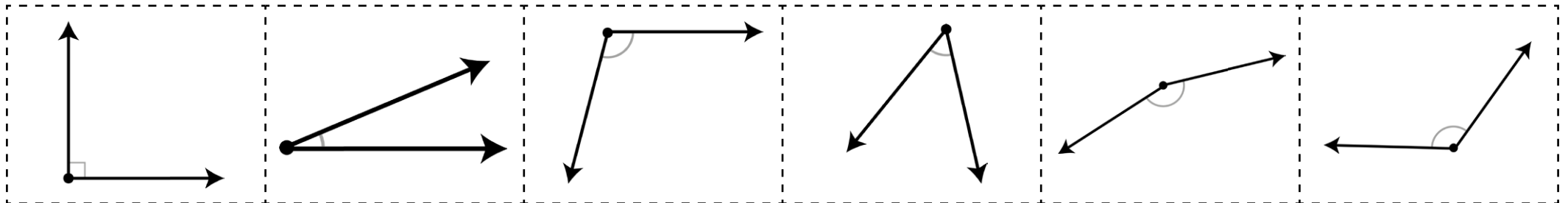
1. Sort the angles from smallest to largest.
2. Write if the angles are acute, obtuse or right angles.
3. Estimate how many degrees you think each angle is.

Smallest

Largest



Cut out and use these angles to order.

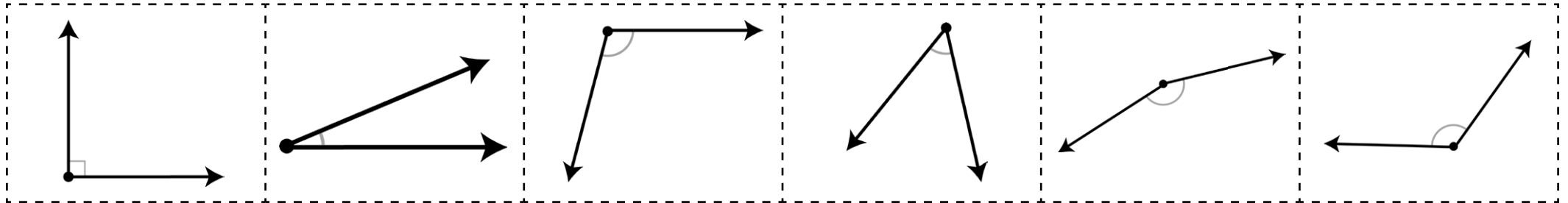




Compare the Angles

Write mathematical sentences using the $<$ or $>$ signs to compare two angles.

Cut out and use these angles to compare.





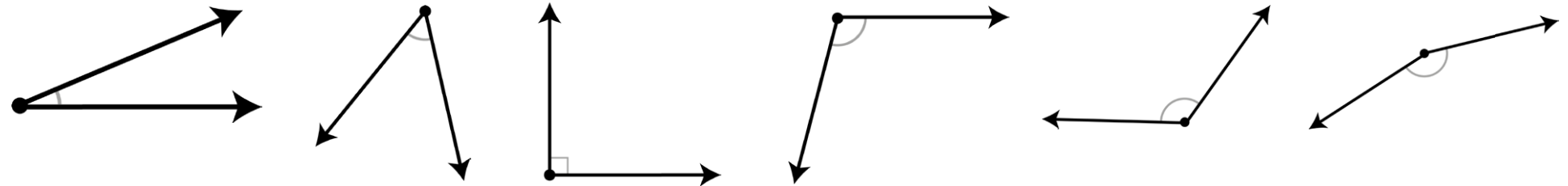
Order the Angles

Answers

Sort the angles from smallest to largest.

Smallest

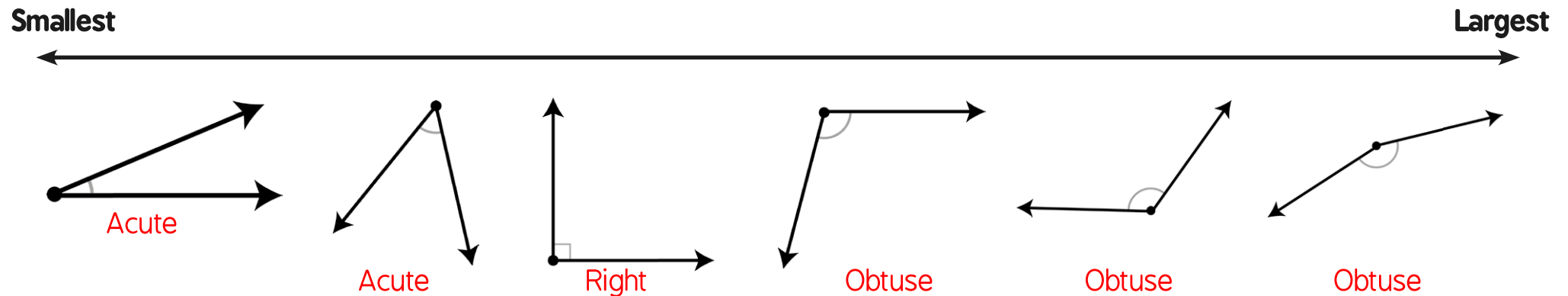
Largest





Order the Angles Answers

1. Sort the angles from smallest to largest.
2. Write if the angles are acute, obtuse or right angles.





Order the Angles

Answers

1. Sort the angles from smallest to largest.
2. Write if the angles are acute, obtuse or right angles.
3. Estimate how many degrees you think each angle is.

Smallest

Largest

