

Year 2 Maths Activity Mat

2

Section 1

Use the correct sign
< or > to make these true:

16		30
19		17


Section 2

What are the missing numbers? **???**

12	11	10		8		6		4
----	----	----	--	---	--	---	--	---

Section 3

A lorry has 10 wheels. How many wheels are there on 2 lorries?



Section 4

Which number is the odd one out? How do you know?

20 30 15
50 40 10




Section 6

Gill is going to see a film. It starts in half an hour. It is now 10 o'clock. What time will the film start?

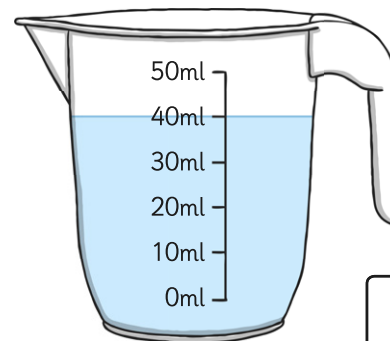
Section 5

There are 4 cakes. Two of them are eaten. What fraction of cakes are left?



Section 7

How much juice is in the jug?



Section 8

Are these answers right? Can you correct any which are not correct?

$$31 + 10 = 30$$

$$17 - 4 = 16$$

$$13 + 5 = 18$$

Year 2 Maths Activity Mat: 2

Answers

Section 1

Use the correct sign
< or > to make these true:

16	<	30
19	>	17

Section 2

What are the missing numbers? **???**

12	11	10	9	8	7	6	5	4
----	----	----	---	---	---	---	---	---

Section 3

A lorry has 10 wheels. How many wheels are there on 2 lorries?



20

Section 4

Which number is the odd one out? How do you know?

20 30 15
50 40 10



15 because the other numbers end with a 0.

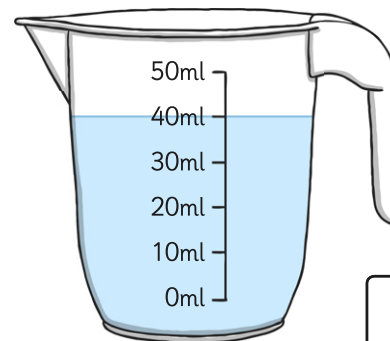
Section 6

Gill is going to see a film. It starts in half an hour. It is now 10 o'clock. What time will the film start?

10:30 or half past 10

Section 7

How much juice is in the jug?



40ml

Section 8

Are these answers right? Can you correct any which are not correct?


$31 + 10 =$ ~~40~~ **41**

$17 - 4 =$ ~~16~~ **13**

$13 + 5 = 18$ ✓

Section 5

There are 4 cakes. Two of them are eaten. What fraction of cakes are left?



$\frac{1}{2}$