

Year 2 Maths Activity Mat


2

Section 1

Use the correct sign
< or > to make these true:

145		415
201		102


Section 2

What are the missing numbers? 

75		65	60			45	
----	--	----	----	--	--	----	--

Section 3

Zoe puts her zoo animals in twos. She has 14 pairs. How many animals are there altogether?



Section 4

Which number is the odd one out? Explain how you know.

107 204 113
 91 115




.....

Section 6

Fran has 1 hour and 15 minutes until her dance exam. It is now 10am. What time will the exam start?

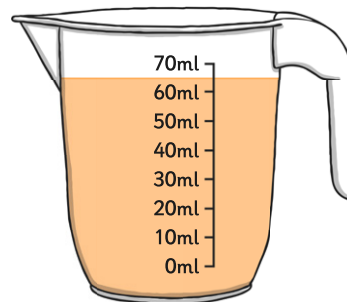
Section 5

Mia eats one cake. Her sister eats one cake. What fraction of the cakes are left?



Section 7

If a 40ml glass of a juice is poured out, how much will be left in the jug?



Section 8

Billy has 112 football cards. He has given 22 of them away. He thinks he should have 95 left. Is he correct? Explain how you know.



.....
.....
.....

Year 2 Maths Activity Mat: 2


Answers

Section 1

Use the correct sign
< or > to make these true:

145	<	415
201	>	102


Section 2

What are the missing numbers? 

75	70	65	60	55	50	45	40
----	-----------	----	----	-----------	-----------	----	-----------

Section 3

Zoe puts her zoo animals in twos. She has 14 pairs. How many animals are there altogether?



28

Section 4

Which number is the odd one out? Explain how you know.

107 204 113
 91 115



204 because it is not odd.

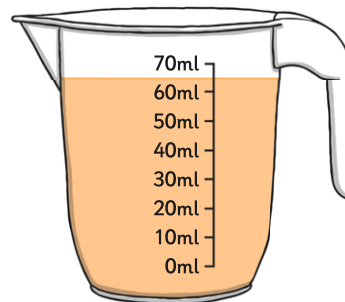
Section 6

Fran has 1 hour and 15 minutes until her dance exam. It is now 10am. What time will the exam start?

11.15 or quarter past 11

Section 7


If a 40ml glass of a juice is poured out, how much will be left in the jug?



25ml

Section 5

Mia eats one cake. Her sister eats one cake. What fraction of the cakes are left?



$\frac{1}{2}$

Section 8

Billy has 112 football cards. He has given 22 of them away. He thinks he should have 95 left. Is he correct? Explain how you know.



No he is not correct.

112 - 22 = 90