

Year 2 Maths Activity Mat

Section 1

There are 16 cars in a car park.
Half of them are white. How many of them are white?

Section 2

Put these numbers in order, smallest to largest:

15 5 17 10 8

--	--	--	--	--

Section 3


This table shows the number of girls and boys who have pets, in one class. Find the total number of children who have a dog, and how many children have a cat.

Pet	Girls	Boys	Total
Dog	10	7	
Cat	12	6	

Section 4

Draw the hands on the clock to show this time:

Half past 2



Section 5

What 2D shape are the faces of a cube?

.....

Section 6

I have these coins:



Do I have enough to buy a lolly for 25p?

.....

How do you know?

.....

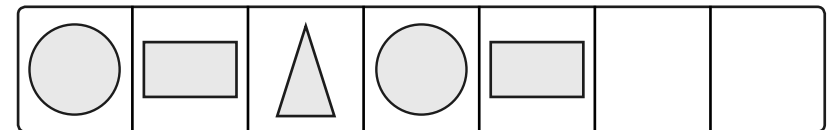
Section 7

Write your own **number sentence** which has the same answer as:

$20 - 4 =$ $13 + 5 =$

Section 8

What 2 shapes will come next in the pattern?



Year 2 Maths Activity Mat: 4

Answers

Section 1

There are 16 cars in a car park.

Half of them are white. How many of them are white?

8

Section 2

Put these numbers in order, smallest to largest:

15 5 17 10 8

5 8 10 15 17

Section 3


This table shows the number of girls and boys who have pets, in one class. Find the total number of children who have a dog, and how many children have a cat.

Pet	Girls	Boys	Total
Dog	10	7	17
Cat	12	6	18

Section 4

Draw the hands on the clock to show this time:

Half past 2



Section 5

What 2D shape are the faces of a cube?

Square

Section 6

I have these coins:



Do I have enough to buy a lolly for 25p?

No

How do you know?

The coins add up to 22p.

Section 7

Write your own **number sentence** which has the same answer as:

Own number sentence equalling 16 and 18

Section 8

What 2 shapes will come next in the pattern?

