

Year 2 Maths Activity Mat

②


Section 1

Use the correct sign < or > to make these true:

10 20 3 8

Section 2

What are the missing numbers?



Section 3

Zac has 12 new felt-tips. Harry has 8 more. How many felt-tips has Harry got?



Section 4

Which number is the odd one out?
Explain how you know.

16 18
 10 7

.....

.....

Section 6

Dance class starts at 9 o'clock. The class lasts for an hour. What time will it finish?

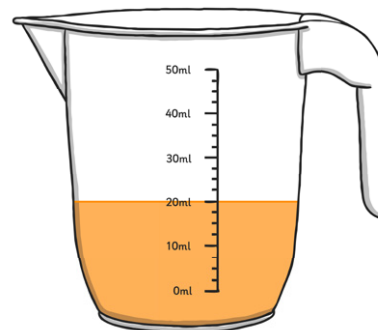
Section 5

Jas eats half of the pizza. What fraction of the pizza is left?



Section 7

How much juice is in the jug?



Section 8

Are these correct? If not, can you make them right?

$$11 + 4 = 20$$

$$20 - 15 = 9$$

$$13 + 7 = 20$$

Year 2 Maths Activity Mat: 2

Answers

Section 1

Use the correct sign < or > to make these true:

$$10 < 20 \quad 3 < 8$$

Section 2

What are the missing numbers?

2	4	6	8	10	12	14	16
---	---	---	---	----	----	----	----

Section 3

Zac has 12 new felt-tips. Harry has 8 more. How many felt-tips has Harry got?



20

Section 4

Which number is the odd one out?
Explain how you know.

16 18
10 7

..... 7 because it is an odd number.

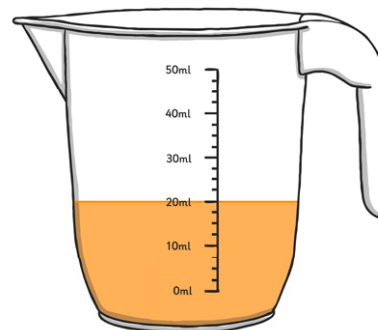
Section 6

Dance class starts at 9 o'clock. The class lasts for an hour. What time will it finish?

10 o'clock

Section 7

How much juice is in the jug?



20ml

Section 8

Are these correct? If not, can you make them right?

$$11 + 4 = 20$$

No, $11 + 4 = 15$

$$20 - 15 = 9$$

No, $20 - 15 = 5$

$$13 + 7 = 20$$

Yes

Section 5

Jas eats half of the pizza. What fraction of the pizza is left?



$\frac{1}{2}$